




NAME _____

DATE _____

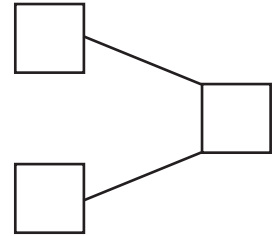
CAMPARING THE NUMBERS



Count the objects and fill in the number bond and place value chart. Complete the sentences to add the tens and ones.

1)  $5 \times 10 = 50$
 $6 \times 1 = 6$

$50 + 6 = \underline{\quad}$

How much 56 is more than 50 ? Ans: $\underline{\quad}$.



2)  $8 \times 10 = 80$
 $9 \times 1 = 9$

$80 + 9 = \underline{\quad}$

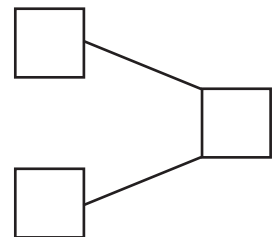
How much 89 is more than 80 ? Ans: $\underline{\quad}$.


Tens	Ones

3)  $6 \times 10 = 60$
 $5 \times 1 = 5$

$60 + 5 = \underline{\quad}$

How much 65 is more than 60 ? Ans: $\underline{\quad}$.



4)  $4 \times 10 = 40$

$40 + 0 = \underline{\quad}$

How much 40 is more than 40 ? Ans: $\underline{\quad}$.

Tens	Ones