



NAME _____

DATE _____

COUNTING

Draw quick tens and ones to show each number. Label the first drawing as less than, greater than or equal to the second drawing. Write a phrase from the word bank to compare the numbers.



Word Bank:

is greater than

is less than



is equal to

1)





15 _____ 20

2)





22 _____ 12

3)





30 _____ 26

4)





24 _____ 35

5)



30 _____ 30

6)



29 _____ 30