



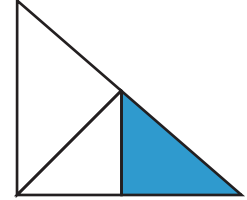
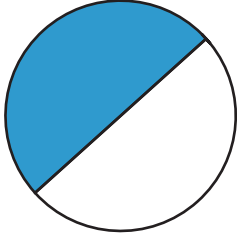
NAME _____

DATE _____

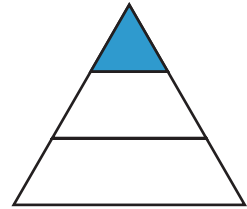
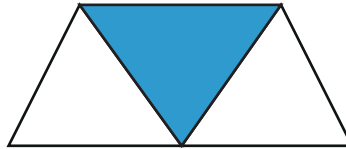

SIMPLE FRACTIONS

Which shape matches the fraction.



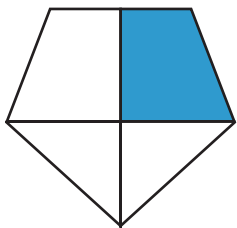
1. Which shape matches the fractions $1/2$?



2. Which shape matches the fraction $1/3$?



3. Which shape matches the fraction $1/4$?



4. Which shape matches the fraction $1/5$?

