



NAME _____



DATE _____

SIMPLE FRACTIONS



Parts of a group.

Example:

What fraction of the squares are yellow?

 $\frac{1}{2}$  $\frac{1}{3}$  $\frac{1}{4}$  $\frac{1}{5}$



1. What fraction of the flowers are red?

 $\frac{1}{3}$  $\frac{1}{4}$  $\frac{1}{2}$  $\frac{1}{5}$

2. What fraction of the circles are green?

 $\frac{1}{5}$  $\frac{1}{2}$  $\frac{1}{3}$  $\frac{1}{4}$

3. What fraction of the cars are pink?

 $\frac{1}{3}$  $\frac{1}{2}$  $\frac{1}{5}$  $\frac{1}{4}$