




NAME _____

DATE _____

SIMPLE FRACTIONS

Parts of a group.

1. What fraction of the butterflies are yellow?



$\frac{1}{3}$

$\frac{1}{4}$

$\frac{1}{2}$

$\frac{1}{5}$

2. What fraction of the bottles are green?





$\frac{1}{4}$

$\frac{1}{2}$

$\frac{1}{3}$

$\frac{1}{5}$

3. What fraction of the hats are red?






$\frac{1}{2}$

$\frac{1}{5}$

$\frac{1}{3}$

$\frac{1}{4}$

4. What fraction of the fish are orange?



$\frac{1}{2}$

$\frac{1}{4}$

$\frac{1}{3}$

$\frac{1}{5}$