



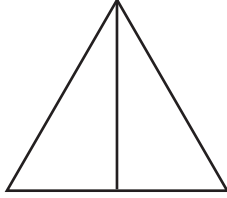
NAME _____

DATE _____

SYMMETRY


Are the shapes divided into equal parts? Write yes (Y) or no (N).

Example:



Y

1)



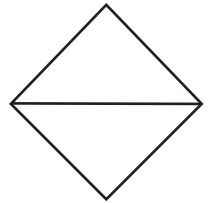
—

2)



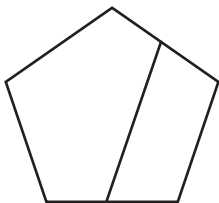
—

3)



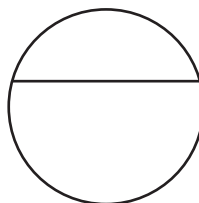
—

4)



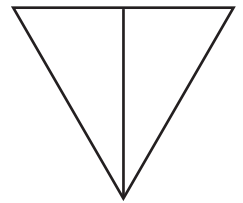
—

5)



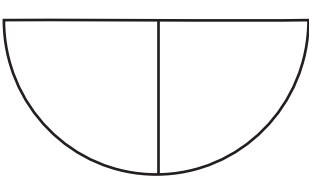
—

6)



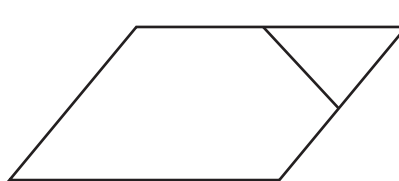
—

7)



—

8)



—

9)



—