

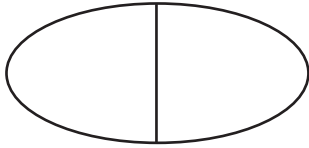


NAME _____ DATE _____

SYMMETRY

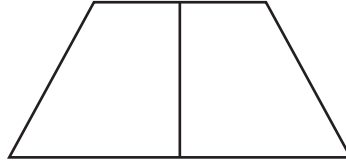
Are the shapes divided into equal parts? Write yes (Y) or no (N).

1)



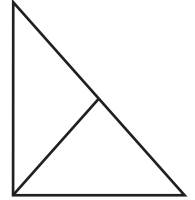
—

2)



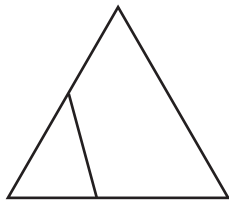
—

3)



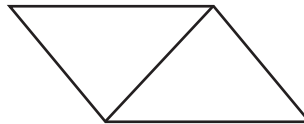
—

4)



—

5)



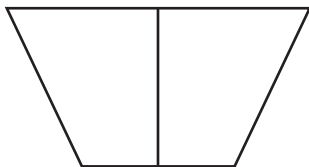
—

6)



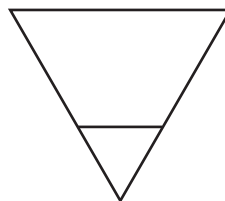
—

7)



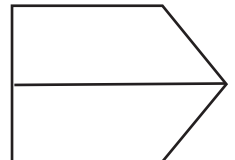
—

8)



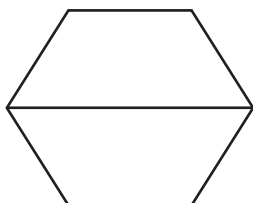
—

9)



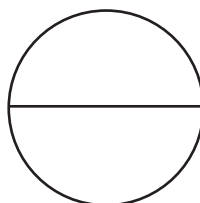
—

10)



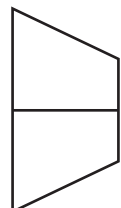
—

11)



—

12)



—