

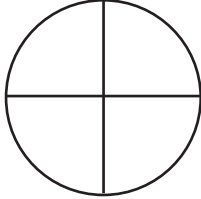


NAME _____ DATE _____

SYMMETRY

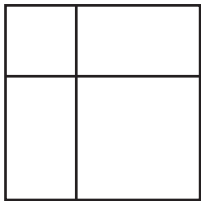
Are the shapes divided into quarters? Write yes (Y) or no (N).

Example:



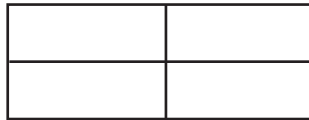
Y

1)



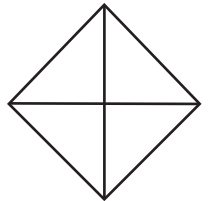
—

2)



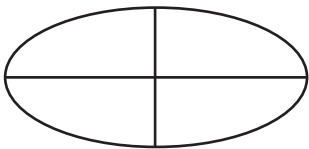
—

3)



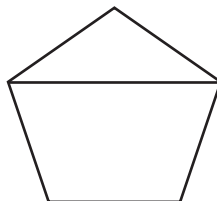
—

4)



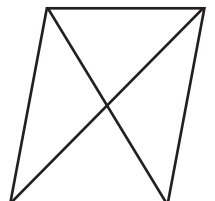
—

5)



—

6)



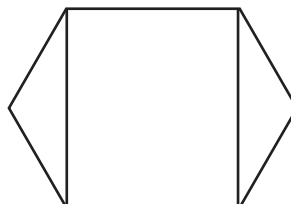
—

7)



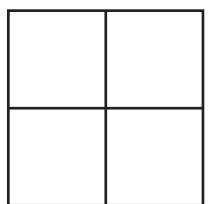
—

8)



—

9)



—