




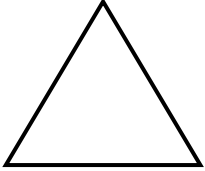
NAME \_\_\_\_\_ DATE \_\_\_\_\_

## COMPARE EDGES, VERTICES AND FACES

Tick (✓) on the correct shape.

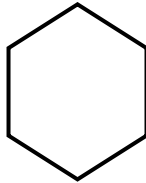
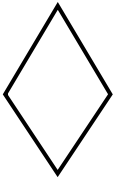
Example:

Which shape has more corners?



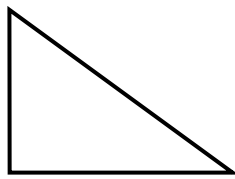

---

1) Which shape has more sides?



---

2) Which shape has more corners?



---

3) Which shape has more sides?

