



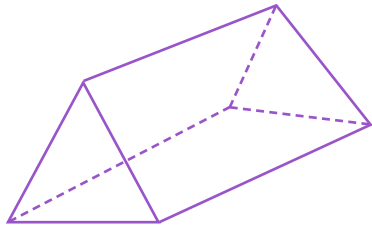
NAME _____ DATE _____

COUNT EDGES, CORNERS AND FACES

Understanding the mathematical terminology and concepts in 3D shapes.

Example:

How many faces does this figure have?



5





4



6

1) How many edges does this figure have?



1

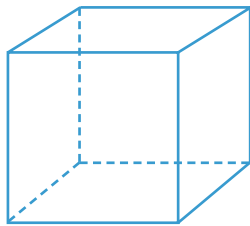


0



2

2) How many faces does this figure have?



5


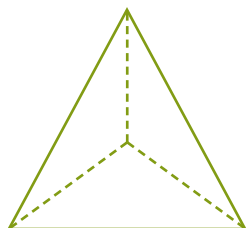


7



6

3) How many vertices does this figure have?



4



5



6