




NAME \_\_\_\_\_ DATE \_\_\_\_\_

## COUNT EDGES, CORNERS AND FACES

Understanding the mathematical terminology and concepts in 3D shapes.

1) How many vertices does this figure have?

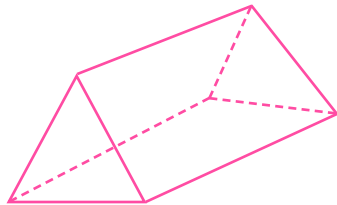


0

1

2

2) How many edges does this figure have?

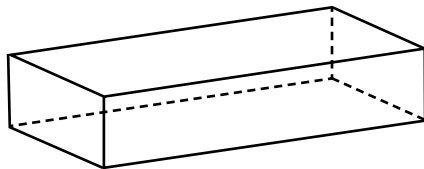


7

4

9

3) How many faces does this figure have?

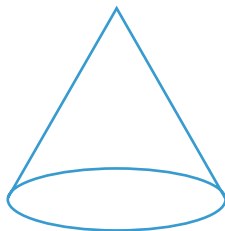


8

6

10

4) How many edges does this figure have?



1

3

4