





NAME _____ DATE _____

IDENTIFY 2-DIMENSIONAL SHAPES



Identify the right one.

Example:



Which of these is a rectangle?



1. Which of these is a triangle?



2. Which of these is a circle?



3. Which of these is a square?

