

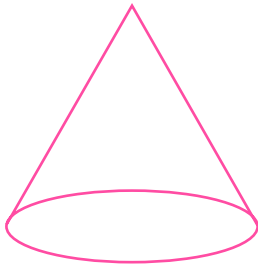


NAME \_\_\_\_\_ DATE \_\_\_\_\_

## IDENTIFY 3 - DIMENSIONAL FIGURES

Which 3 - dimensional figure is this?

1)



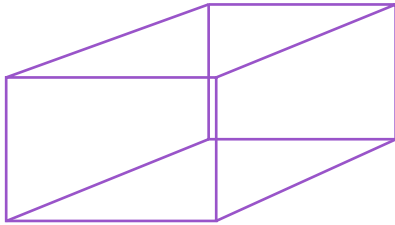
Sphere

Prism

Cone

---

2)



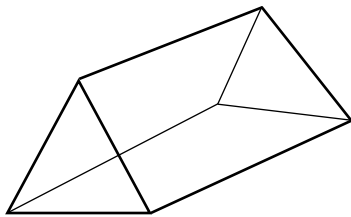
Rectangular Cube

Prism

Cube

---

3)



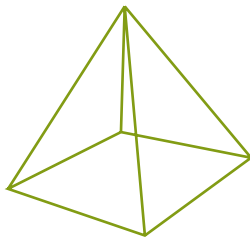
Prism

Triangular Prism

Cone

---

4)



Square Pyramid

Prism

Sphere