



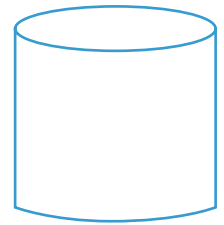
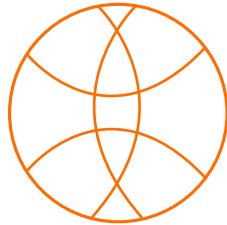
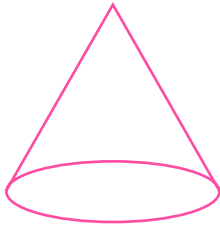
NAME \_\_\_\_\_ DATE \_\_\_\_\_

## IDENTIFY 3 - DIMENSIONAL FIGURES

Which 3 - dimensional figure is this?

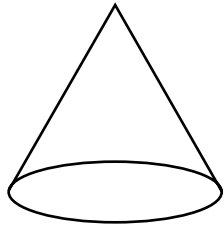
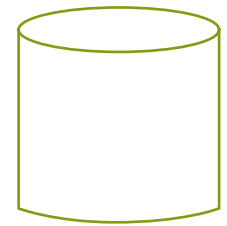
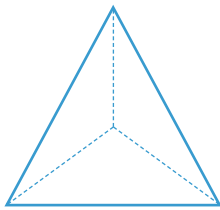
Example:

Which of these is a sphere?



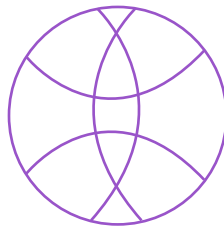
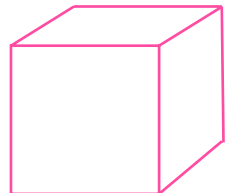
---

1) Which of these is a cone?



---

2) Which of these is a cube?



---

3) Which of these is a cylinder?

