



NAME _____

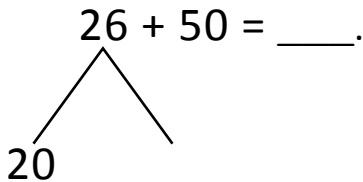
DATE _____

NUMBER BONDS AND ARROW WAY METHODS

Add or subtract the following expressions using number bonds and arrow way methods.

a) $26 + 50 = \underline{\quad}$.

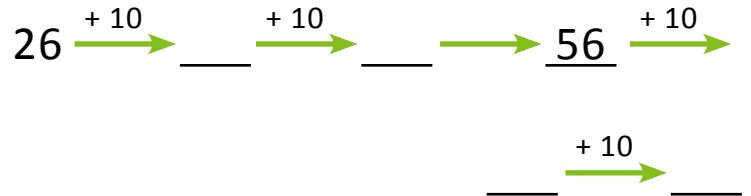
Number bond:



$50 + \underline{\quad} = 70$

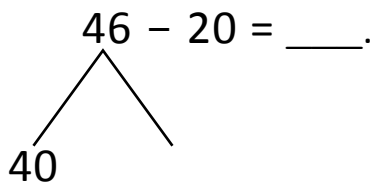
$70 + 6 = \underline{\quad}$.

Arrow way:



b) $46 - 20 = \underline{\quad}$.

Number bond:



$40 - 20 = \underline{\quad}$.

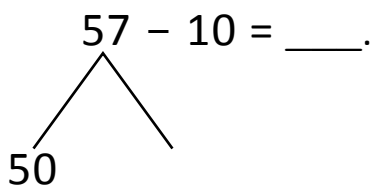
$20 + \underline{\quad} = 26$

Arrow way:



c) $57 - 10 = \underline{\quad}$.

Number bond:



$50 - 10 = \underline{\quad}$.

$40 + 7 = \underline{\quad}$.

Arrow way:

