



NAME _____


DATE _____

SUBTRACTION WORD PROBLEMS

Read the word problem. Draw and label. Write a number sentence and statement.

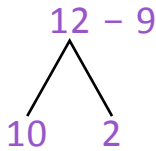
Example:

Toby counted 12 cows in the field. 9 cows are catting and remaining cows are sleeping. How many cows are sleeping?



$= 2$

$1 + 2 = 3$




$10 - 9 = 1$

$1 + 2 = 3$

3 cows are sleeping.

1) Mark made 13 party invitations. He gave 6 invitations to his friends. How many invitations are left?



2) Claire made 13 paper boats. She gave 4 paper boats to Mike. How many paper boats are left with Claire?

