



NAME _____

DATE _____

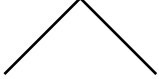
SUBTRACTIONS

Solve the problems by counting on and using a number bond to take from ten.

- 1) Mark collected 14 flowers. He collected 9 sunflowers and the remaining are Rose flowers. How many Rose flowers Mark collected?

$$14 - 9 = \underline{\quad}$$

$$14 - 9 = \underline{\quad}$$

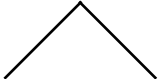


Mark collected rose flowers.

- 2) David has 17 balls. 9 balls are new. How many balls are old?

$$17 - 9 = \underline{\quad}$$

$$17 - 9 = \underline{\quad}$$

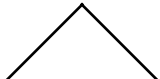


David has old balls.

- 3) Emma has 13 oranges. She made orange juice with 9 oranges. How many oranges are left?

$$13 - 9 = \underline{\quad}$$

$$13 - 9 = \underline{\quad}$$

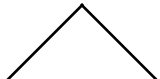


Emma is left with oranges.

- 4) William bought 11 lollipops. He gave 9 lollipops to his friends. How many lollipops are left with William?

$$11 - 9 = \underline{\quad}$$

$$11 - 9 = \underline{\quad}$$



William is left with lollipops.