



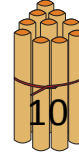
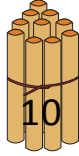
NAME _____

DATE _____

COUNTING THE NUMBERS

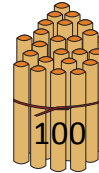
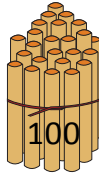

Counting the numbers by making the bundles 1's, 10's and 100's.

a) Bundles of 10's.



2 tens = ____.

b) Bundles of 100's.



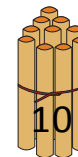
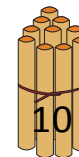
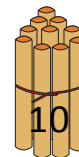
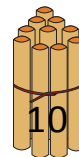
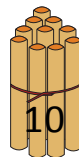
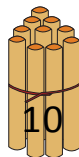
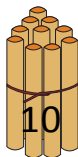
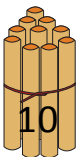
3 hundreds = ____.

c) Bundles of 1's.



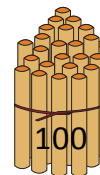
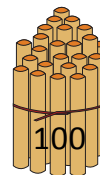
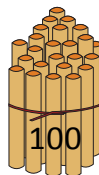
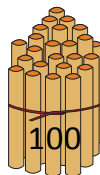

6 ones = ____.

d) Bundles of 10's.



8 tens = ____.

e) Bundles of 100's.



5 hundreds = ____.