




NAME _____

DATE _____

COUNTING THE NUMBERS

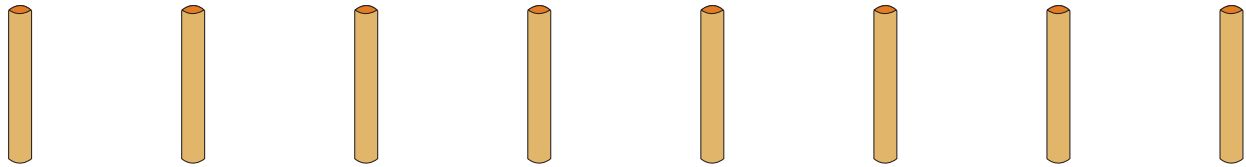
Counting the numbers by making the bundles 1's, 10's and 100's.

a) Bundles of 100's.



9 hundreds = _____.

b) Bundles of 1's.




8 ones = ____.

c) Bundles of 10's.



4 tens = _____.

d) Bundles of 100's.



7 hundreds = _____.

e) Bundles of 10's.



2 tens = _____.