



NAME _____ DATE _____

FINDING PLACE VALUE BASED ON OBJECTS

Count the objects and fill in the number bond. Complete the sentences to add the tens and ones.

1)  $4 \times 10 = 40$

 $5 \times 1 = 5$

___ + ___ = ___

___ tens + ___ ones = ___.

Tens	Ones

2)  $5 \times 10 = 50$


 $9 \times 1 = 9$

___ + ___ = ___

___ tens + ___ ones = ___.

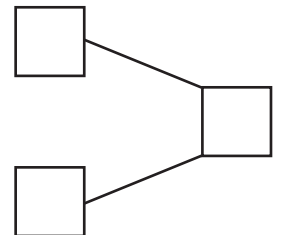
Tens	Ones

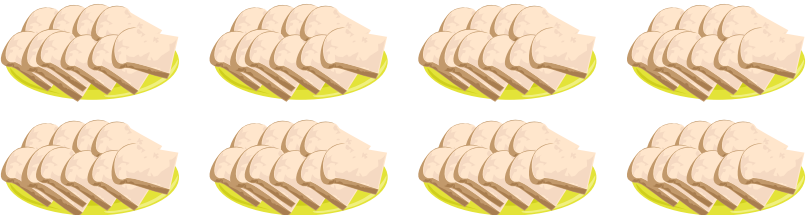
3)  $6 \times 10 = 60$

 $1 \times 1 = 1$

___ + ___ = ___

___ tens + ___ ones = ___.



4)  $8 \times 10 = 80$

___ + ___ = ___

___ tens + ___ ones = ___.

