




NAME _____

DATE _____

WORD PROBLEMS

Count the tens and ones and complete the statement.

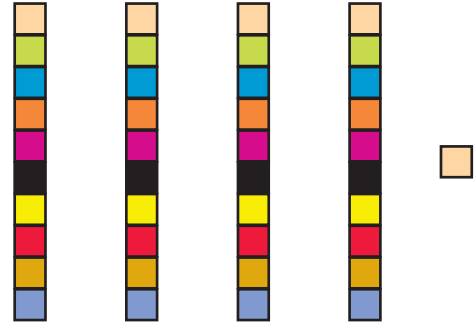
1)



Tens	Ones

There are ___ flowers.

2)



Tens	Ones

There are ___ blocks.

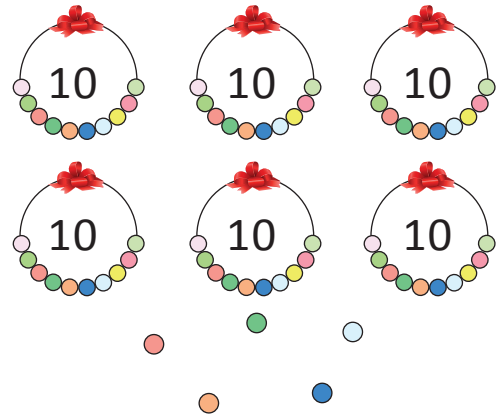
3)



Tens	Ones

There are ___ pencils.

4)



Tens	Ones

There are ___ beads.