




NAME _____

DATE _____

WORD PROBLEMS

Count the tens and ones and complete the statement.


Example:



Tens	Ones
2	4

There are 24 grapes.


1)



Tens	Ones

There are ____ pigeons.

2)



Tens	Ones

There are ____ flowers.