




NAME _____

DATE _____

WORD PROBLEMS

Count the tens and ones and complete the statement.

1)



Tens	Ones

There are ___ bread slice.


2)



Tens	Ones

There are ___ coins.

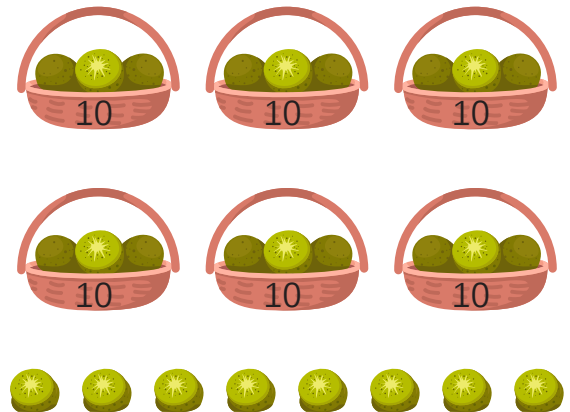
3)



Tens	Ones

There are ___ ants.

4)



Tens	Ones

There are ___ kiwi.