



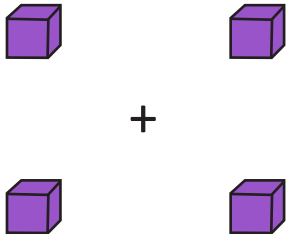
NAME _____

DATE _____

ADDITION DOUBLES

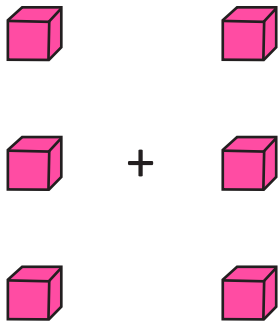
Count the blocks. Then complete the addition sentence to show the sum of two equal groups.

Example:



$$\boxed{2} + \boxed{2} = \boxed{4}$$

1)



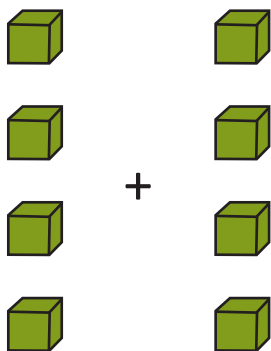
$$\square + \square = \square$$

2)



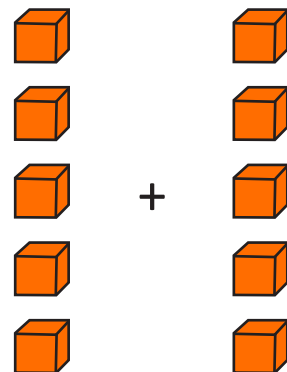
$$\square + \square = \square$$

3)



$$\square + \square = \square$$

4)



$$\square + \square = \square$$