



NAME _____

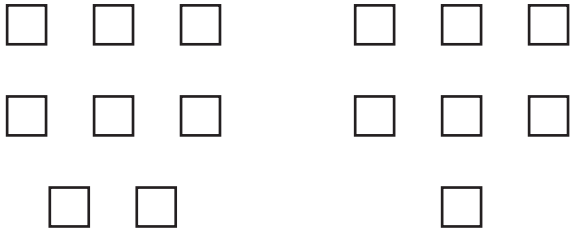

DATE _____

ADDITIONS

Change the picture to make a ten. Write the easier number sentence and solve.

1.

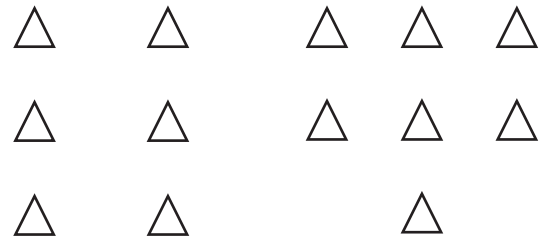
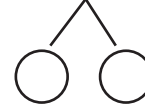
$8 + 7$



$10 + \underline{\quad} = \underline{\quad}$

4.


$6 + 7$



$10 + \underline{\quad} = \underline{\quad}$

2.


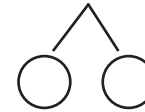
$9 + 9$



$10 + \underline{\quad} = \underline{\quad}$

5.

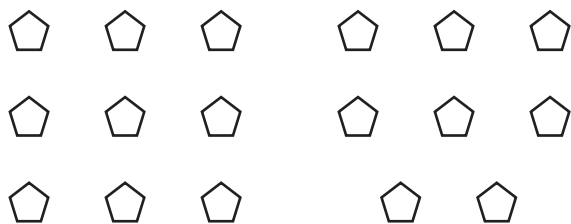
$8 + 4$



$10 + \underline{\quad} = \underline{\quad}$

3.

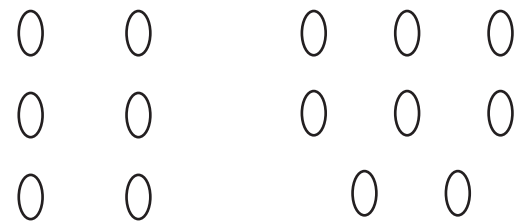
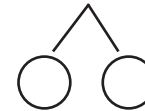
$9 + 8$



$10 + \underline{\quad} = \underline{\quad}$

6.

$6 + 8$



$10 + \underline{\quad} = \underline{\quad}$