

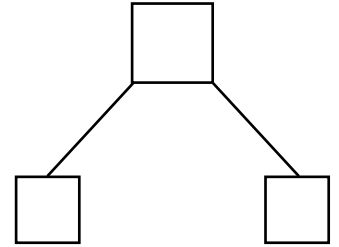
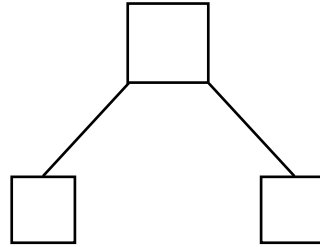
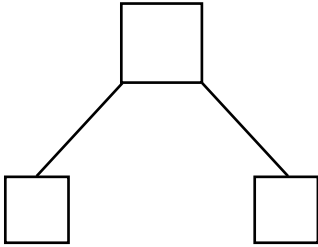


NAME \_\_\_\_\_ DATE \_\_\_\_\_

## ADDITION (USING QUICK TENS)

Draw quick tens and a number bond to help you solve the number sentences.

1)  $20 + 10 = \underline{\quad}$       2)  $30 + 10 = \underline{\quad}$       3)  $10 + 5 = \underline{\quad}$



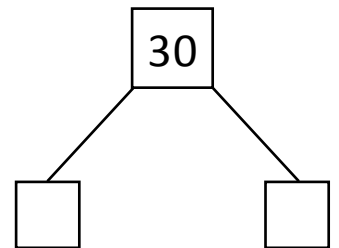
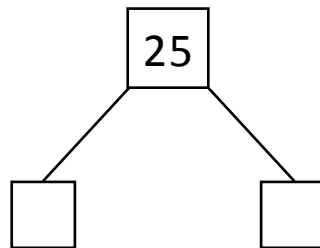
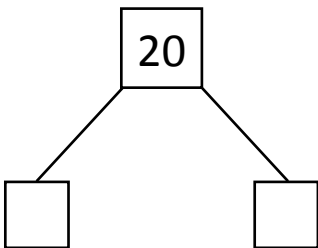
+

+

+

---

4)  $15 + 5 = \underline{\quad}$       5)  $20 + 5 = \underline{\quad}$       6)  $25 + 5 = \underline{\quad}$



+

+

+