



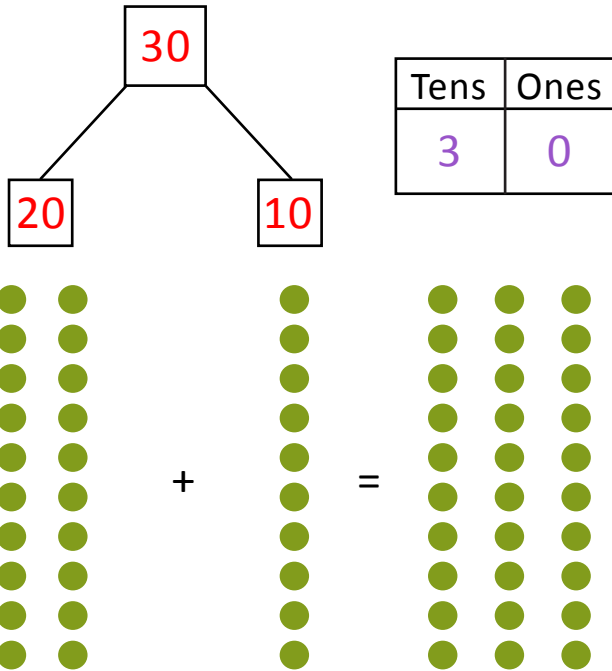
NAME \_\_\_\_\_ DATE \_\_\_\_\_

## ADDITION (USING QUICK TENS AND ONES)

Draw using quick tens and ones. Complete the number bond and write the sum in the place value chart and the number sentence.

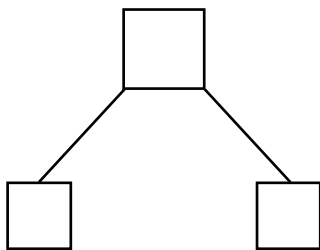
Example:

a)  $20 + 10 = \underline{30}$

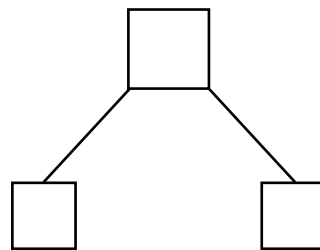


1)  $15 + 10 = \underline{\quad}$

2)  $24 + 10 = \underline{\quad}$



Tens	Ones



Tens	Ones

+      =

+      =