

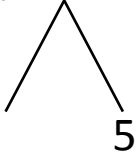


NAME \_\_\_\_\_ DATE \_\_\_\_\_

## ADDITION OF TWO DIGIT NUMBERS

Solve using number bonds. Write the two number sentences that show that you added the ten first. Draw quick tens and ones.

a)  $15 + 13 = \underline{\quad}$

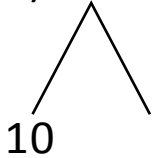


+

$13 + 10 = \underline{\quad}$

$\underline{\quad} + 5 = \underline{\quad}$

b)  $12 + 24 = \underline{\quad}$

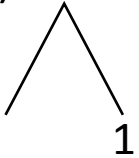


+

$24 + 10 = \underline{\quad}$

$\underline{\quad} + 2 = \underline{\quad}$

c)  $11 + 17 = \underline{\quad}$

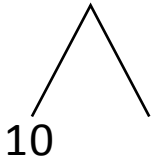


+

$17 + 10 = \underline{\quad}$

$\underline{\quad} + 1 = \underline{\quad}$

d)  $19 + 16 = \underline{\quad}$



+

$19 + 10 = \underline{\quad}$

$\underline{\quad} + 6 = \underline{\quad}$