

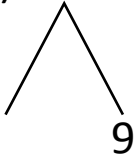


NAME \_\_\_\_\_ DATE \_\_\_\_\_

## ADDITION OF TWO DIGIT NUMBERS

Solve using number bonds. Write the two number sentences that show that you added the ten first. Draw quick tens and ones.

a)  $19 + 16 = \underline{\quad}$

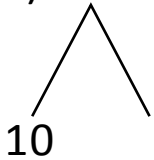


+

$16 + 10 = \underline{\quad}$

$\underline{\quad} + 9 = \underline{\quad}$

b)  $12 + 25 = \underline{\quad}$

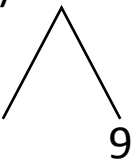


+

$25 + 10 = \underline{\quad}$

$\underline{\quad} + 2 = \underline{\quad}$

c)  $19 + 15 = \underline{\quad}$

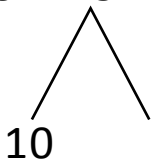


+

$15 + 10 = \underline{\quad}$

$\underline{\quad} + 9 = \underline{\quad}$

d)  $25 + 13 = \underline{\quad}$



+

$25 + 10 = \underline{\quad}$

$\underline{\quad} + 3 = \underline{\quad}$