

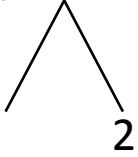


NAME _____ DATE _____

ADDITION OF TWO DIGIT NUMBERS

Solve using number bonds. Write the two number sentences that show that you added the ten first. Draw quick tens and ones.

a) $12 + 17 = \underline{\quad}$

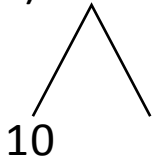


+

$17 + 10 = \underline{\quad}$

$\underline{\quad} + 2 = \underline{\quad}$

b) $14 + 14 = \underline{\quad}$

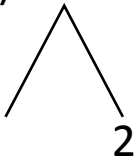


+

$14 + 10 = \underline{\quad}$

$\underline{\quad} + 4 = \underline{\quad}$

c) $12 + 27 = \underline{\quad}$

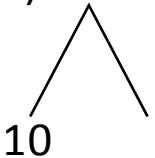


+

$27 + 10 = \underline{\quad}$

$\underline{\quad} + 2 = \underline{\quad}$

d) $13 + 16 = \underline{\quad}$



+

$16 + 10 = \underline{\quad}$

$\underline{\quad} + 3 = \underline{\quad}$