

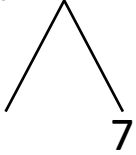


NAME \_\_\_\_\_ DATE \_\_\_\_\_

## ADDITION OF TWO DIGIT NUMBERS

Solve using number bonds. Write the two number sentences that show that you added the ten first. Draw quick tens and ones.

a)  $17 + 20 = \underline{\quad}$

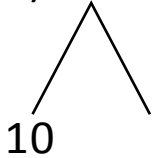


+

$20 + 10 = \underline{\quad}$

$\underline{\quad} + 7 = \underline{\quad}$

b)  $13 + 20 = \underline{\quad}$

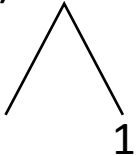


+

$20 + 10 = \underline{\quad}$

$\underline{\quad} + 3 = \underline{\quad}$

c)  $11 + 28 = \underline{\quad}$

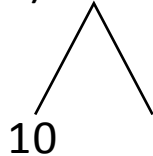


+

$28 + 10 = \underline{\quad}$

$\underline{\quad} + 1 = \underline{\quad}$

d)  $15 + 21 = \underline{\quad}$



+

$21 + 10 = \underline{\quad}$

$\underline{\quad} + 5 = \underline{\quad}$