



NAME _____

DATE _____


ADDITIONS - ADDING ONE MORE

Write the number that is 1 more.


1)

13	
----	--


7)

	
--	--


2)

	
---	--


8)

	
--	--


3)

	
--	--

9)

	
--	--

4)

	
---	--

10)

11	
----	--

5)

9	
---	--


11)

--	--

6)

8	
---	--

12)

	
--	--