




NAME \_\_\_\_\_

DATE \_\_\_\_\_

## ADDING ONE MORE

Draw one more in the group. Write the numbers to describe the new picture in the box.

1)



1 more than 7 is \_\_\_\_.

$$7 + 1 = \underline{\quad}$$


2)



1 more than 9 is \_\_\_\_.

$$9 + 1 = \underline{\quad}$$


3)



1 more than 10 is \_\_\_\_.

$$10 + 1 = \underline{\quad}$$

4)



1 more than 3 is \_\_\_\_.

$$3 + 1 = \underline{\quad}$$