



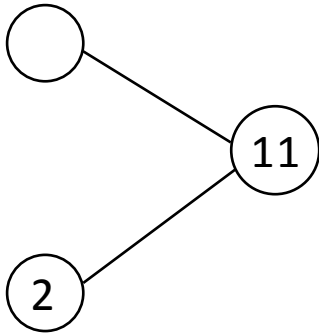
NAME \_\_\_\_\_

DATE \_\_\_\_\_

## ADDITIONS

Solve the following number bonds. Complete the mathematical sentences to make them equal to the given number bond.

a)



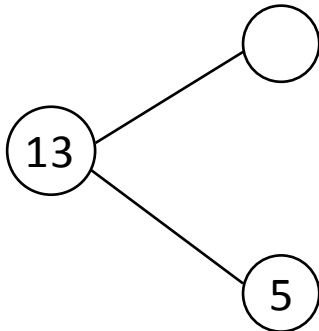
$2 + \underline{\quad} = 11$

$3 + \underline{\quad} = 11$

$4 + \underline{\quad} = 11$

$5 + \underline{\quad} = 11$

b)



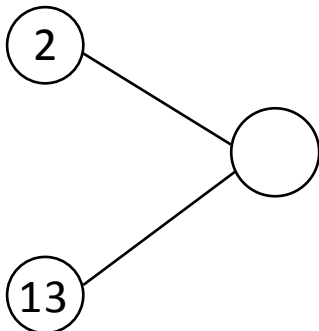
$5 + \underline{\quad} = 13$

$6 + \underline{\quad} = 13$

$7 + \underline{\quad} = 13$

$8 + \underline{\quad} = 13$

c)



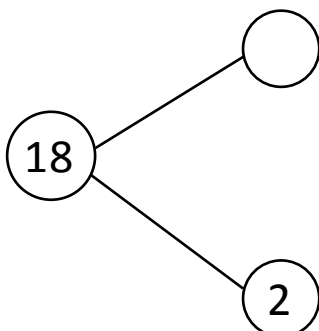
$2 + \underline{\quad} = 15$

$3 + \underline{\quad} = 15$

$4 + \underline{\quad} = 15$

$5 + \underline{\quad} = 15$

d)



$2 + \underline{\quad} = 18$

$3 + \underline{\quad} = 18$

$4 + \underline{\quad} = 18$

$5 + \underline{\quad} = 18$