




NAME \_\_\_\_\_


DATE \_\_\_\_\_

## ADDITION SENTENCES

Write an expression that in the given groups the number of objects are equal or not, if so write an equal sign between the groups.




$$\boxed{2} + \boxed{4} \quad \bigcirc$$



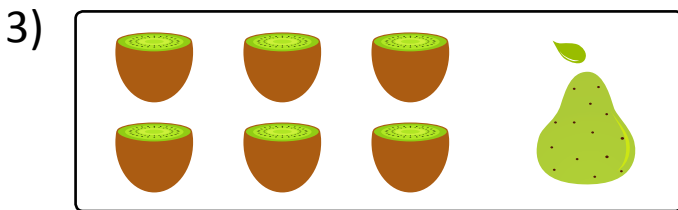
$$\boxed{4} + \boxed{2}$$



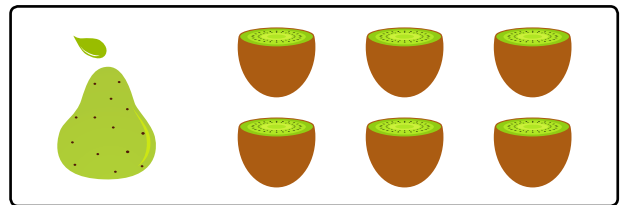
$$\boxed{3} + \boxed{6} \quad \bigcirc$$




$$\boxed{6} + \boxed{3}$$




$$\boxed{6} + \boxed{1} \quad \bigcirc$$



$$\boxed{1} + \boxed{6}$$



$$\boxed{5} + \boxed{5} \quad \bigcirc$$



$$\boxed{5} + \boxed{5}$$