



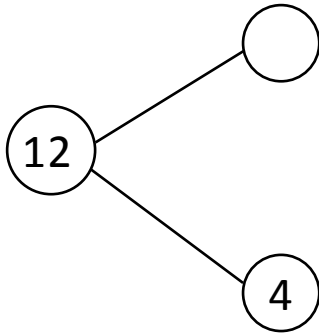
NAME _____

DATE _____

ADDITIONS

Solve the following number bonds. Complete the mathematical sentences to make them equal to the given number bond.

a)



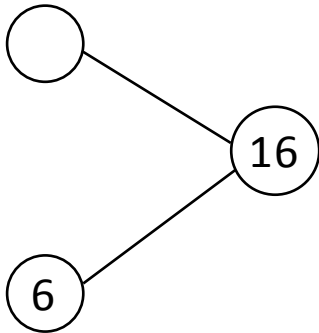
$8 + \underline{\quad} = 12$

$7 + \underline{\quad} = 12$

$6 + \underline{\quad} = 12$

$5 + \underline{\quad} = 12$

b)



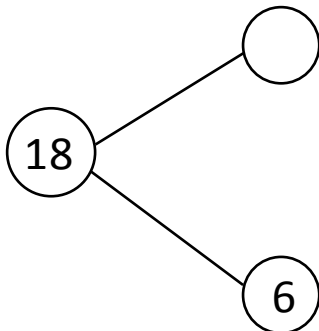
$6 + \underline{\quad} = 16$

$5 + \underline{\quad} = 16$

$4 + \underline{\quad} = 16$

$3 + \underline{\quad} = 16$

c)



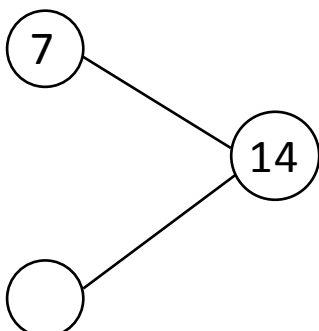
$6 + \underline{\quad} = 18$

$7 + \underline{\quad} = 18$

$8 + \underline{\quad} = 18$

$9 + \underline{\quad} = 18$

d)



$7 + \underline{\quad} = 14$

$6 + \underline{\quad} = 14$

$5 + \underline{\quad} = 14$

$4 + \underline{\quad} = 14$