





NAME _____ DATE _____

ADDITION WORDS PROBLEMS (ADDING 2 NUMBERS)

Change the picture to make a ten. Write the easier number sentence and solve.



- 1) There are 5 sparrows and 7 penguins on the tree. How many birds are there on the tree altogether?



$$\underline{\quad} + \underline{\quad} = \underline{\quad}.$$

$$10 + \underline{\quad} = \underline{\quad}.$$

- 2) Tom has 6 carrots. His mother gave 8 more carrots. How many carrots Tom is having altogether?



$$\underline{\quad} + \underline{\quad} = \underline{\quad}.$$

$$10 + \underline{\quad} = \underline{\quad}.$$