



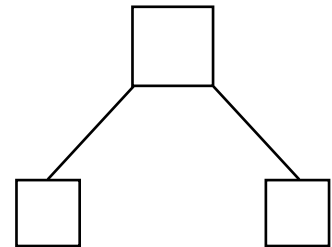
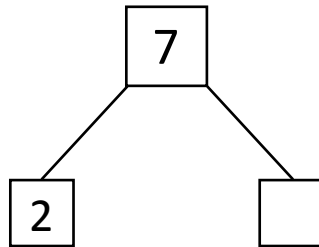
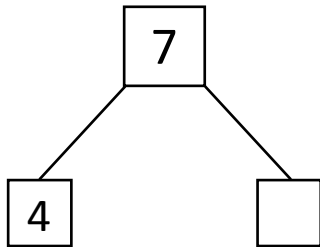
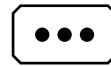
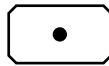


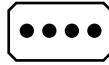
NAME _____

DATE _____

WAYS TO MAKE 7!

Showing number bonds according to matching the numbers.

1) Match the dots to show different ways to make 7. Then draw a number bond for each pair.

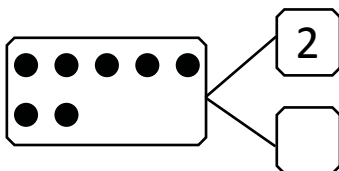


2) Show 2 ways to make 7. Use the number bonds above for help.

$$\square + \square = 3$$

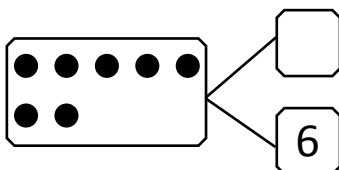
$$1 + \square = \square$$

3) Fill in the missing number in the number bond. Write 2 addition sentences for the number bond you made. Notice where the equal sign is, to make your sentences true.



$$2 + \square = 7$$

$$\square + 2 = 7$$



$$1 + \square = 7$$

$$6 + \square = \square$$