



NAME _____

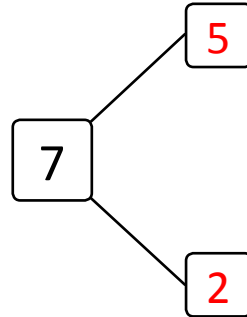

DATE _____

WAYS TO MAKE 7!

Complete the number bond and number sentence.

Example:

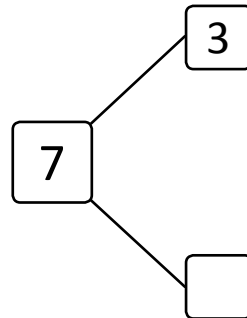

Circle 5. How many more does 5 need to make 7?



$$\boxed{5} + \boxed{2} = \boxed{7}$$

$$\boxed{2} + \boxed{5} = \boxed{7}$$

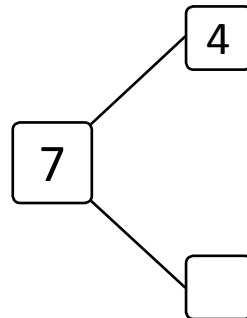

1) Circle 3. How many more does 3 need to make 7?



$$\boxed{3} + \boxed{} = \boxed{7}$$

$$\boxed{} + \boxed{3} = \boxed{7}$$

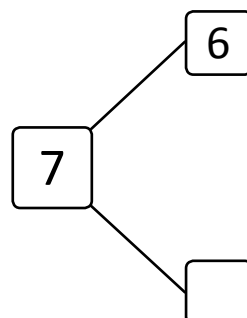

2) Circle 4. How many more does 4 need to make 7?



$$\boxed{4} + \boxed{} = \boxed{7}$$

$$\boxed{} + \boxed{4} = \boxed{7}$$

3) Circle 6. How many more does 6 need to make 7?



$$\boxed{6} + \boxed{} = \boxed{7}$$

$$\boxed{} + \boxed{6} = \boxed{7}$$