



NAME \_\_\_\_\_

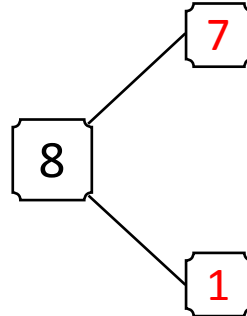
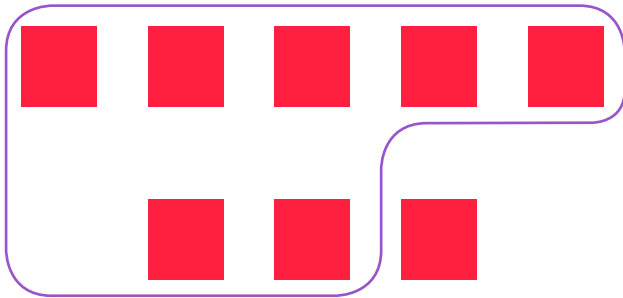
DATE \_\_\_\_\_

## WAYS TO MAKE 8!

Complete the number bond and number sentence.

Example:

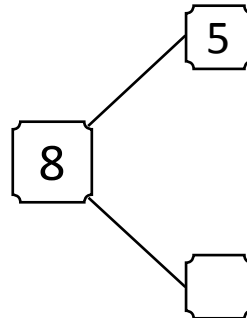
Circle 7. How many more does 7 need to make 8?



$$1 + 7 = 8$$

$$7 + 1 = 8$$

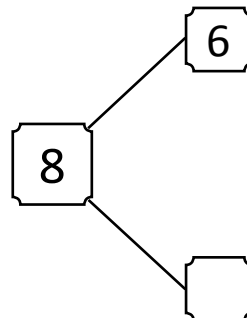

1) Circle 5. How many more does 5 need to make 8?



$$\square + 5 = 8$$

$$5 + \square = 8$$

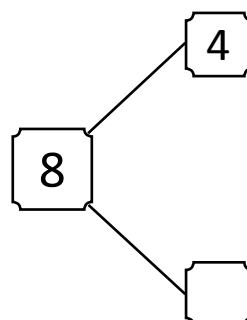

2) Circle 6. How many more does 6 need to make 8?



$$\square + 6 = 8$$

$$6 + \square = 8$$

3) Circle 4. How many more does 4 need to make 8?



$$\square + 4 = 8$$

$$4 + \square = 8$$