



NAME _____

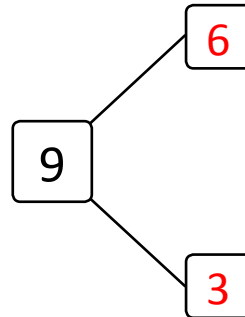
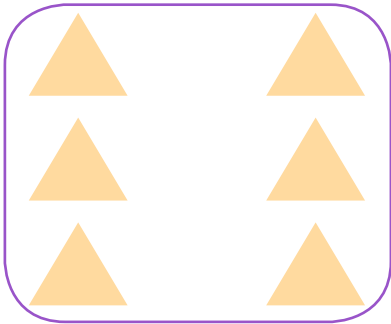
DATE _____

WAYS TO MAKE 9!

Complete the number bond and number sentence.

Example:

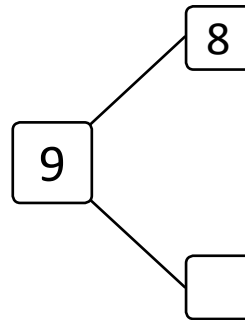

Circle 6. How many more does 6 need to make 9?



$$\boxed{3} + \boxed{6} = \boxed{9}$$

$$\boxed{6} + \boxed{3} = \boxed{9}$$

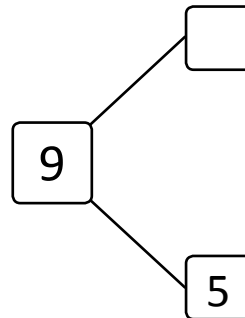

1) Circle 8. How many more does 8 need to make 9?



$$\boxed{} + \boxed{8} = \boxed{9}$$

$$\boxed{8} + \boxed{} = \boxed{9}$$

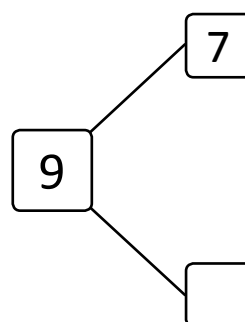
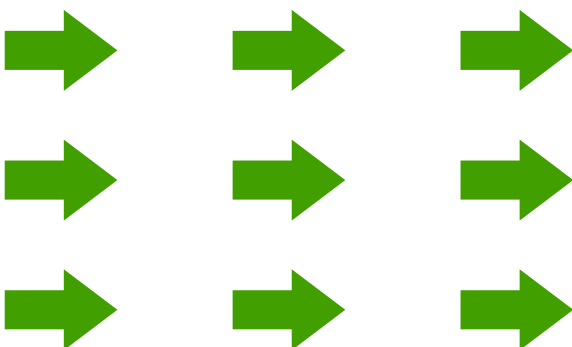
2) Circle 5. How many more does 5 need to make 9?



$$\boxed{5} + \boxed{} = \boxed{9}$$

$$\boxed{} + \boxed{5} = \boxed{9}$$

3) Circle 2. How many more does 2 need to make 9?



$$\boxed{7} + \boxed{} = \boxed{9}$$

$$\boxed{} + \boxed{7} = \boxed{9}$$