






NAME _____

DATE _____

WAYS TO MAKE 10!

Match the followings to show the partners of 10.



Write a number bond for each partners of 10.

