




NAME \_\_\_\_\_ DATE \_\_\_\_\_

# WAYS TO MAKE 8!

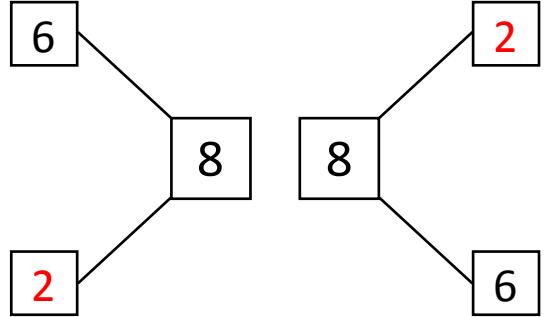
Use the picture to help you write all of the different ways to make 8.

Example:




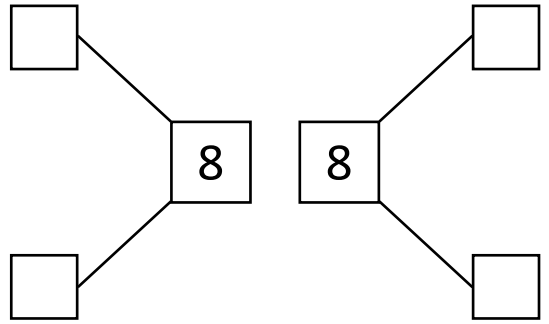
$$\boxed{6} + \boxed{2}$$

$$\boxed{2} + \boxed{6}$$




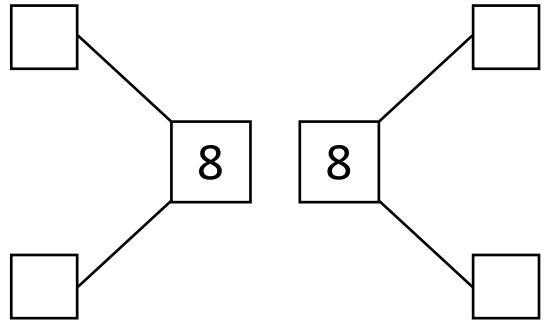
$$\boxed{4} + \boxed{\phantom{0}}$$

$$\boxed{4} + \boxed{\phantom{0}}$$



$$\boxed{3} + \boxed{\phantom{0}}$$

$$\boxed{5} + \boxed{\phantom{0}}$$



$$\boxed{8} + \boxed{\phantom{0}}$$

$$\boxed{0} + \boxed{\phantom{0}}$$

