



NAME _____

DATE _____

WAYS TO MAKE 8!

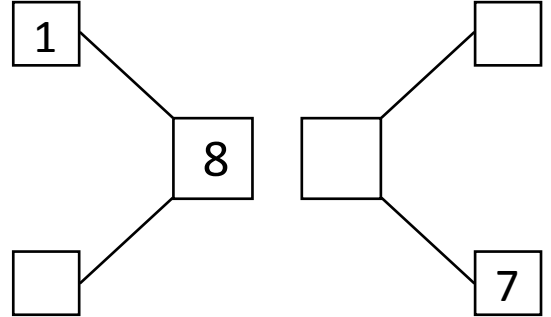
Use the picture to help you write all of the different ways to make 8.




$$\square + 7$$



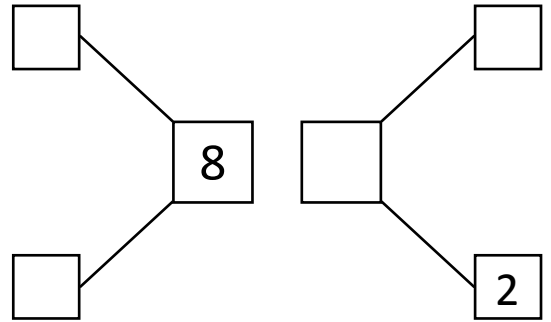
$$7 + \square$$



$$\square + 6$$



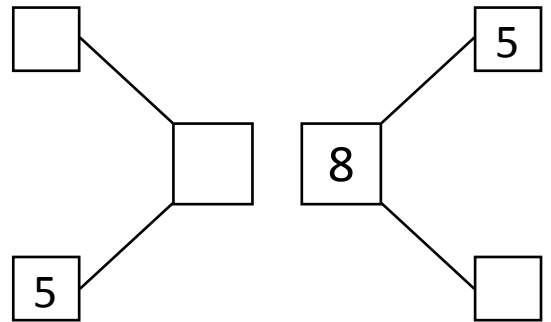
$$6 + \square$$



$$3 + \square$$



$$\square + 3$$



$$4 + \square$$



$$\square + 4$$

