



NAME _____

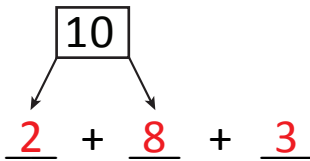
DATE _____

ADDING THREE NUMBERS

Circle the numbers that make ten. Use number bonds and complete number sentences.

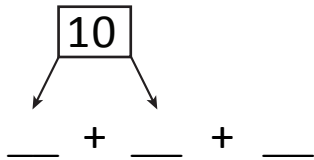
Example:

$$\textcircled{2} + 3 + \textcircled{8} = \boxed{13}$$



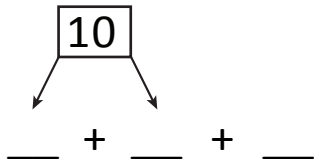
$$\boxed{10} + \underline{3} = \underline{13}$$

1) $5 + 2 + 5 = \boxed{}$



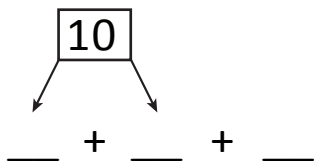
$$\boxed{10} + \underline{} = \underline{}$$

2) $7 + 3 + 2 = \boxed{}$



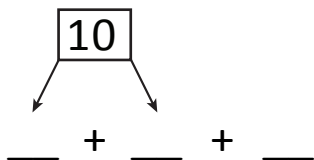
$$\boxed{10} + \underline{} = \underline{}$$

3) $4 + 5 + 6 = \boxed{}$



$$\boxed{10} + \underline{} = \underline{}$$

4) $3 + 5 + 7 = \boxed{}$



$$\boxed{10} + \underline{} = \underline{}$$