



NAME _____

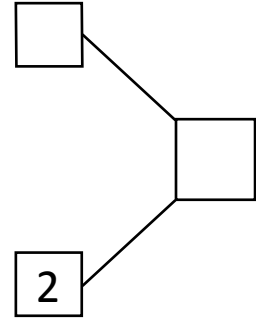
DATE _____

NUMBER BOND

Use the number sentences to draw a picture using dots (●) and fill in the number bond to tell a math story.

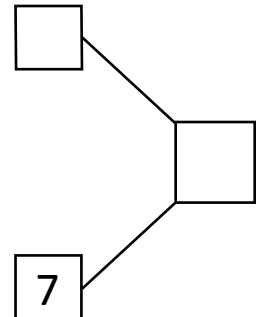
1)

$$\square + \textcircled{+} \square = 2$$



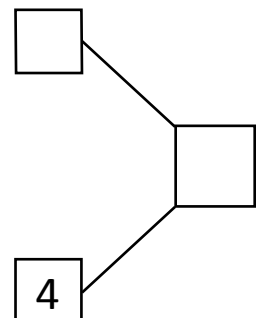
2)

$$\square = 3 + \textcircled{+} \square$$



3)

$$\square + \textcircled{+} \square = 4$$



4)

$$\square = 6 + \textcircled{+} \square = 1$$

