



NAME _____

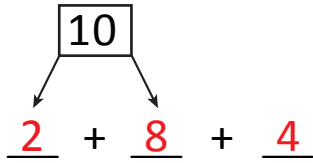

DATE _____

ADDING THREE NUMBERS

Circle the numbers that make ten. Draw a picture and complete the number sentences.

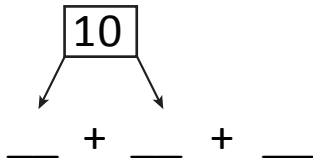
Example:

$$\textcircled{2} + \textcircled{8} + 4 = \boxed{14}$$



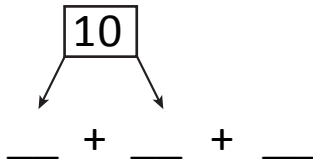
$$\boxed{10} + \underline{4} = \underline{14}$$

1) $7 + 3 + 5 = \boxed{}$



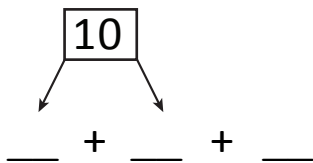
$$\boxed{10} + \underline{} = \underline{}$$

2) $5 + 5 + 1 = \boxed{}$



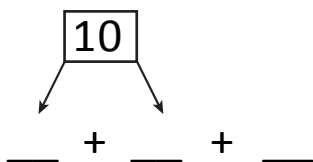
$$\boxed{10} + \underline{} = \underline{}$$

3) $9 + 1 + 3 = \boxed{}$



$$\boxed{10} + \underline{} = \underline{}$$

4) $4 + 6 + 2 = \boxed{}$



$$\boxed{10} + \underline{} = \underline{}$$