



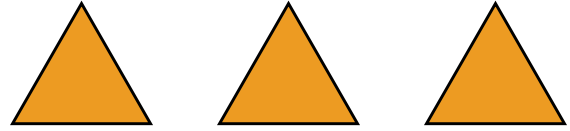

NAME _____

DATE _____

NUMBER BOND

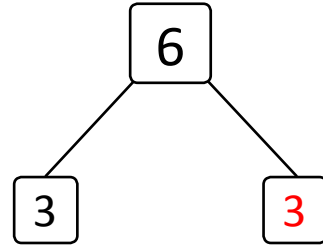
Complete the number bond and number sentences to match the picture.

Example:




$$\boxed{3} + \boxed{3} = \boxed{6}$$

$$\boxed{3} + \boxed{3} = \boxed{6}$$

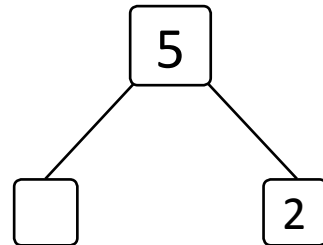


1)

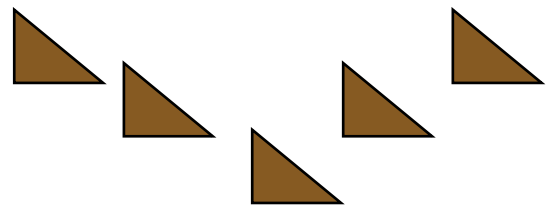



$$\boxed{} + \boxed{} = \boxed{5}$$

$$\boxed{} + \boxed{} = \boxed{5}$$



2)



$$\boxed{} + \boxed{} = \boxed{9}$$

$$\boxed{} + \boxed{} = \boxed{9}$$

