



NAME _____

DATE _____

NUMBER BOND

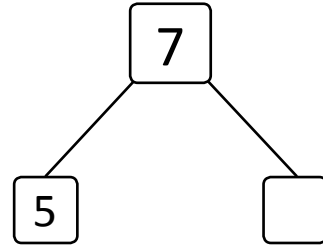
Complete the number bond and number sentences to match the picture.

1)




$$\boxed{5} + \boxed{} = \boxed{7}$$

$$\boxed{2} + \boxed{} = \boxed{7}$$

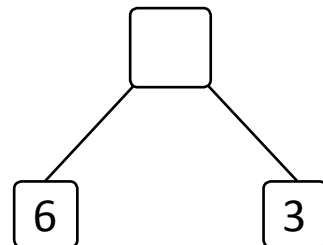


2)

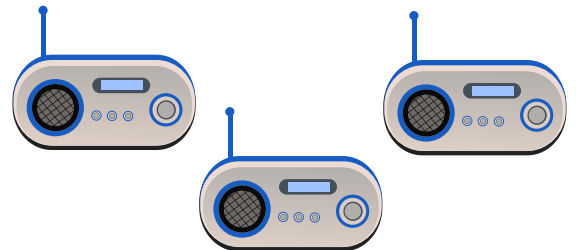



$$\boxed{6} + \boxed{} = \boxed{}$$

$$\boxed{3} + \boxed{} = \boxed{}$$



3)



$$\boxed{4} + \boxed{} = \boxed{}$$

$$\boxed{3} + \boxed{} = \boxed{}$$

