



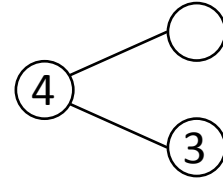
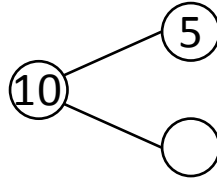
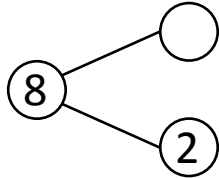
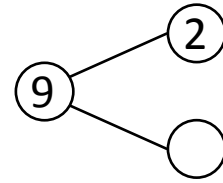
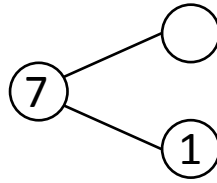
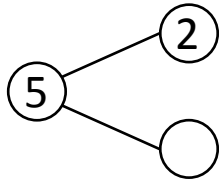
NAME _____

DATE _____

ADDITIONS (USING NUMBER BONDS)

Complete the number bonds.

1)



Fill in the missing numbers that make the number sentences true.

$6 + 1 = \underline{\quad}$

$1 + \underline{\quad} = 4$

$1 + 3 = \underline{\quad}$

$6 + \underline{\quad} = 8$

$2 + 7 = \underline{\quad}$

$\underline{\quad} + 1 = 7$

$6 + 2 = \underline{\quad}$

$\underline{\quad} + 3 = 5$

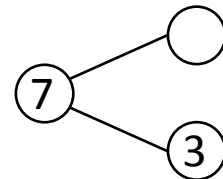
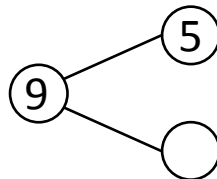
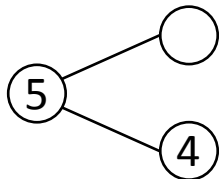
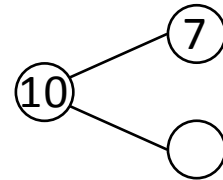
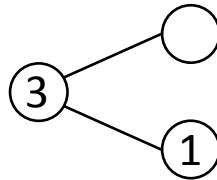
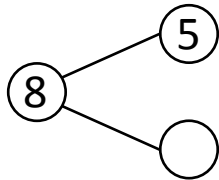
$2 + 3 = \underline{\quad}$

$2 + \underline{\quad} = 9$

$5 + 5 = \underline{\quad}$

$\underline{\quad} + 5 = 10$

2)



Fill in the missing numbers that make the number sentences true.

$2 + 1 = \underline{\quad}$

$\underline{\quad} + 3 = 7$

$4 + 3 = \underline{\quad}$

$2 + \underline{\quad} = 3$

$1 + 4 = \underline{\quad}$

$7 + \underline{\quad} = 10$

$7 + 3 = \underline{\quad}$

$\underline{\quad} + 4 = 5$

$5 + 4 = \underline{\quad}$

$5 + \underline{\quad} = 8$

$5 + 3 = \underline{\quad}$

$\underline{\quad} + 4 = 9$